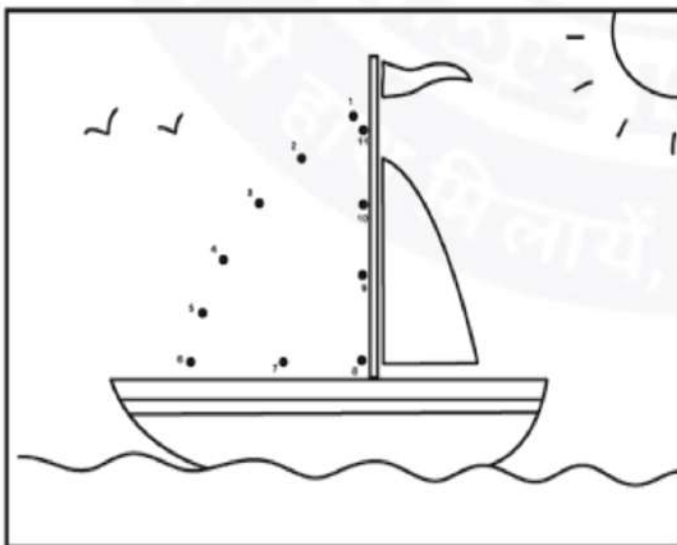

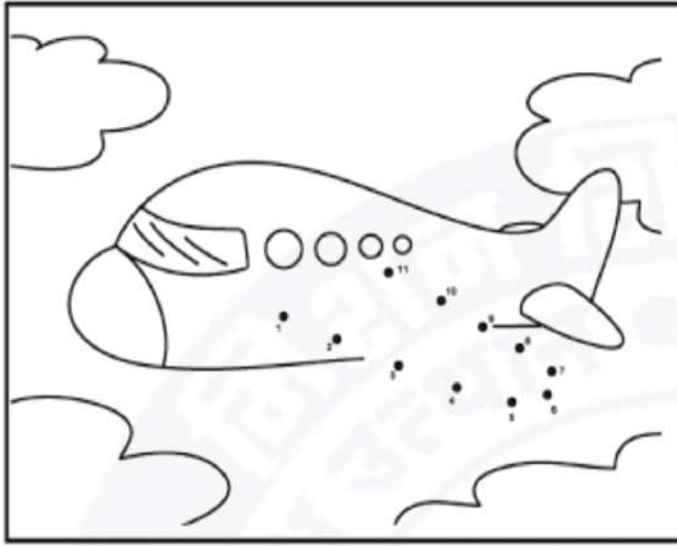



बिंदुओं को मिला कर चित्र बनाओ।



पास वाली वस्तुओं पर गोला लगाओ।



बिंदुओं को मिला कर लिखो।


•	1	1	1	1	1
••	2	2	2	2	2
•••	3	3	3	3	3
••••	4	4	4	4	4
•••••	5	5	5	5	5
••••••	6	6	6	6	6
•••••••	7	7	7	7	7
••••••••	8	8	8	8	8
•••••••••	9	9	9	9	9
••••••••••	10	10	10	10	10

•	1	1	1	1	1
••	2	2	2	2	2
•••	3	3	3	3	3
••••	4	4	4	4	4
•••••	5	5	5	5	5
••••••	6	6	6	6	6
•••••••	7	7	7	7	7
••••••••	8	8	8	8	8
•••••••••	9	9	9	9	9
••••••••••	10	10	10	10	10

गिन कर वस्तुओं की संख्या लिखो।






















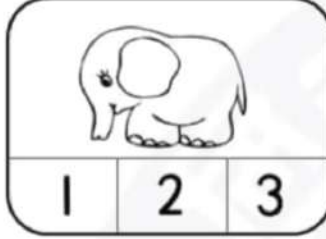
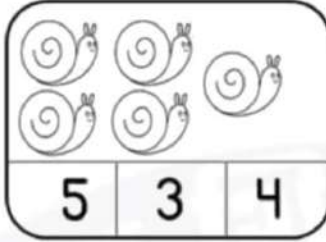









गिनकर नंबर पर गोला लगाओ।




गिनकर नंबर लिखो।




गिन कर वस्तुओं को मिलान करो।



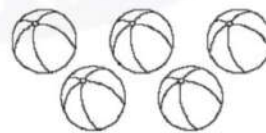
5



3



2



1



3

नंबर के आगे और पीछे का नंबर लिखो।

	8	
--	---	--

	1	
--	---	--

	5	
--	---	--

	6	
--	---	--

	7	
--	---	--

	2	
--	---	--

	4	
--	---	--

	3	
--	---	--

	9	
--	---	--


	10	
--	----	--

	12	
--	----	--

	13	
--	----	--

बड़ा और छोटा नंबर का चिन्ह लगाओ।

3



7

9 > 4

5 < 8

2 < 6

7 > 6

1 < 10

4 < 5

2 < 1

2 < 7

0 < 3

6 < 0

4 < 3

8 < 9

6 < 2

0 < 7



3 < 4

7 < 8

9 < 1

5 < 2

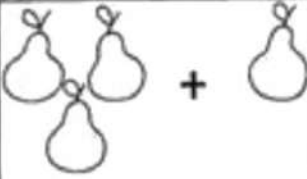

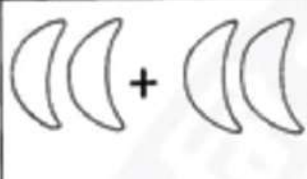

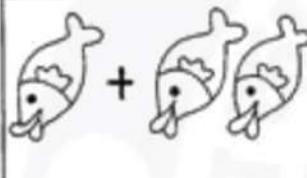

सबसे बड़ा नंबर छांटो।









सबसे छोटा नंबर छांटो।




जोड़ कर लिखो।


 $3 + 1 =$	 $4 + 2 =$
 $2 + 2 =$	 $3 + 2 =$
 $1 + 2 =$	 $3 + 3 =$


जोड़ कर लिखो।


 $3 + 2 =$	 $1 + 1 =$
 $2 + 2 =$	 $2 + 1 =$
 $3 + 1 =$	 $2 + 2 =$


जोड़ो।


-   


$$\begin{array}{r} 9 \\ + 5 \\ \hline \end{array}$$
-   


$$\begin{array}{r} 7 \\ + 4 \\ \hline \end{array}$$
-   


$$\begin{array}{r} 15 \\ + 3 \\ \hline \end{array}$$
-   

$$\begin{array}{r} 12 \\ + 8 \\ \hline \end{array}$$
-   

$$\begin{array}{r} 12 \\ + 6 \\ \hline \end{array}$$
-   


$$\begin{array}{r} 6 \\ + 5 \\ \hline \end{array}$$
-   


$$\begin{array}{r} 8 \\ + 8 \\ \hline \end{array}$$
-   


$$\begin{array}{r} 14 \\ + 3 \\ \hline \end{array}$$
-   


$$\begin{array}{r} 5 \\ + 10 \\ \hline \end{array}$$


जोड़ो।


-   


$$\begin{array}{r} 12 \\ + 7 \\ \hline \end{array}$$
-   


$$\begin{array}{r} 10 \\ + 10 \\ \hline \end{array}$$
-   


$$\begin{array}{r} 1 \\ + 12 \\ \hline \end{array}$$
-   

$$\begin{array}{r} 13 \\ + 3 \\ \hline \end{array}$$
-   

$$\begin{array}{r} 14 \\ + 5 \\ \hline \end{array}$$
-   

$$\begin{array}{r} 7 \\ + 11 \\ \hline \end{array}$$
-   

$$\begin{array}{r} 8 \\ + 15 \\ \hline \end{array}$$
-   

$$\begin{array}{r} 16 \\ + 3 \\ \hline \end{array}$$
-   

$$\begin{array}{r} 7 \\ + 10 \\ \hline \end{array}$$

जोड़ कर ऊपर लिखे नंबर से मिलने वाले नंबर को कलर करो।

2	1	4	3
1+1	3+3	3+1	6+1
4+1	0+1	1+1	1+2
2+0	3+1	2+2	4+4
3+2	1+7	3+3	3+0
0+2	1+0	5+1	2+1

सही जोड़े को बैंगनी और गलत को पीले से भरो।

purple yellow

5	2	5
2	4	5
8	6	10
1	3	1
7	5	3
9	7	4
3	4	1
5	4	2
8	9	3
2	4	2
3	3	8
4	6	10











लाइन की सहायता से जोड़कर लिखो।

1 + 1 =	7 + 2 =
1 + 6 =	3 + 3 =
2 + 3 =	5 + 4 =
8 + 1 =	1 + 9 =
4 + 2 =	5 + 5 =

गिन कर लिखो।







	<input type="text"/>		<input type="text"/>		<input type="text"/>
	<input type="text"/>		<input type="text"/>		

घटा कर सही नंबर लिखो।

















	3 -2 _____ _____
	10 -5 _____ _____
	8 -2 _____ _____
	4 -3 _____ _____
	9 -6 _____ _____
	9 -3 _____ _____
	8 -3 _____ _____
	6 -4 _____ _____
	5 -3 _____ _____
	4 -1 _____ _____

चित्र देखकर घटाओ।

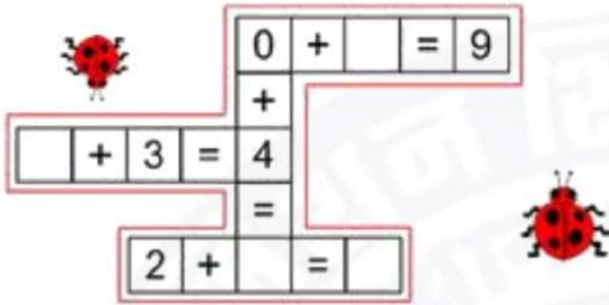


-  = \_\_\_\_\_
-  = \_\_\_\_\_
-  = \_\_\_\_\_
-  = \_\_\_\_\_
-  = \_\_\_\_\_
-  = \_\_\_\_\_

घटा कर मिलाओ।

 9 - 1 =		11 - 1 =	
 6 - 1 =		14 - 1 =	
 10 - 1 =		4 - 1 =	
 8 - 1 =		7 - 1 =	
			
			
			
			

क्रॉसवर्ड को भरो।



0 +  = 9

+ 3 = 4

2 +  =

नंबरों को ट्रेस करो।

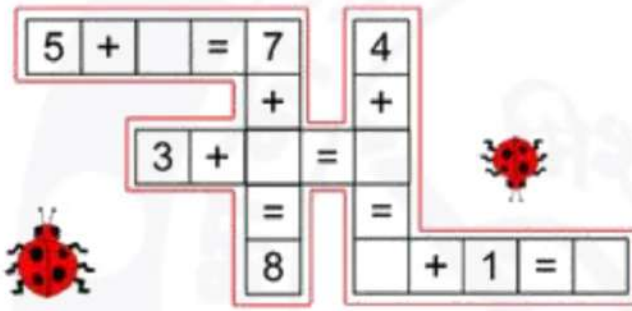
21 21 21 21

22 22 22 22

23 23 23 23

24 24 24 24

25 25 25 25



5 +  = 7

3 +  =

8 +  =

4 +  =

+ 1 =

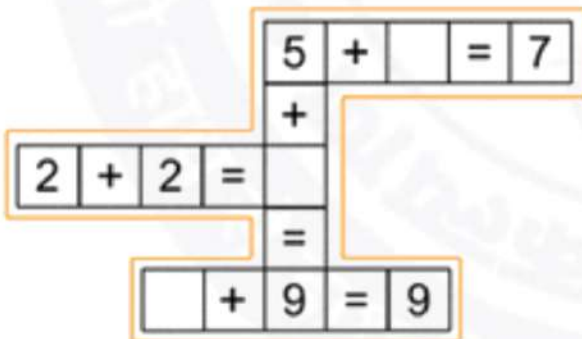
26 26 26 26

27 27 27 27

28 28 28 28

29 29 29 29

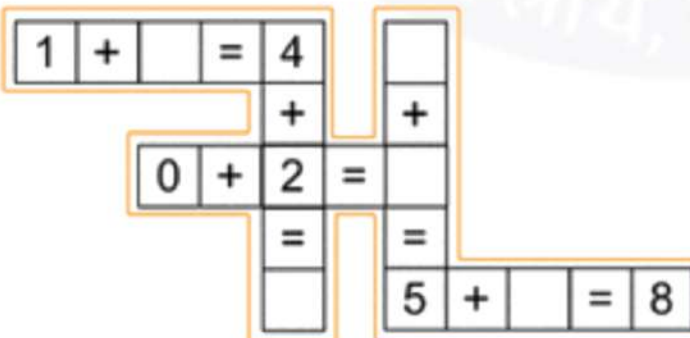
30 30 30 30



5 +  = 7

2 + 2 =

+ 9 = 9




1 +  = 4


0 + 2 =

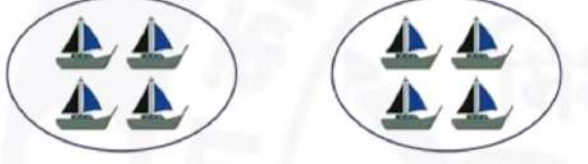
+  = 8




समूह बना कर लिखो।

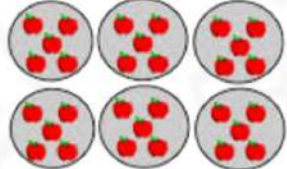
  
 \_\_\_\_\_ groups of \_\_\_\_\_ candies each.


  
 \_\_\_\_\_ groups of \_\_\_\_\_ ducks each.


  
 \_\_\_\_\_ groups of \_\_\_\_\_ boats each.


समूह बना कर जोड़े बनाओ।


example  
  
 3 groups of 3  
 $3 \times 3 = 9$

  
 \_\_\_\_\_ groups of \_\_\_\_\_  
 \_\_\_\_\_ x \_\_\_\_\_ = \_\_\_\_\_


  
 \_\_\_\_\_ groups of \_\_\_\_\_  
 \_\_\_\_\_ x \_\_\_\_\_ = \_\_\_\_\_


  
 \_\_\_\_\_ groups of \_\_\_\_\_  
 \_\_\_\_\_ x \_\_\_\_\_ = \_\_\_\_\_

  
 \_\_\_\_\_ groups of \_\_\_\_\_  
 \_\_\_\_\_ x \_\_\_\_\_ = \_\_\_\_\_


  
 \_\_\_\_\_ groups of \_\_\_\_\_  
 \_\_\_\_\_ x \_\_\_\_\_ = \_\_\_\_\_


गुणा करो।


  
 $4 \times 2 = 8$

  
 $\square \times 4 = 4$

  
 $\square \times 3 = 9$

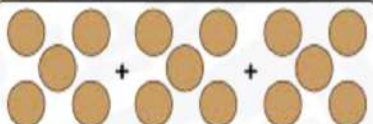
  
 $5 \times \square = 10$

  
 $\square \times 2 = 4$

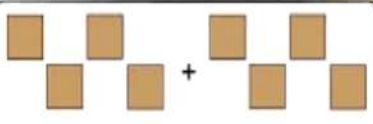
  
 $2 \times \square = 6$

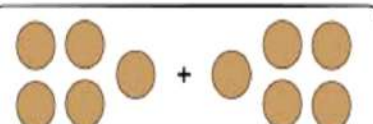
सही हल करो।

  
 $16 + \_ + \_ = \_$   
 $16 \times 3 = \_$

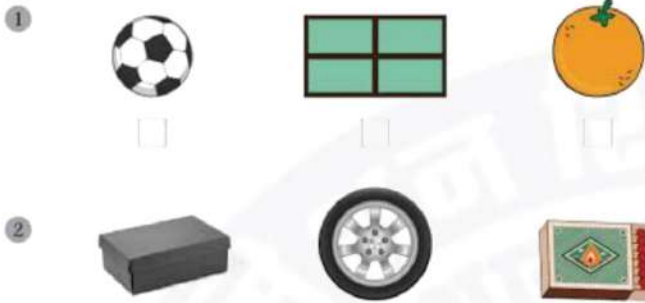
  
 $5 + \_ + \_ = \_$   
 $\_ \times 3 = \_$

  
 $8 + \_ + \_ = \_$   
 $\_ \times 8 = \_$

  
 $4 + \_ = \_$   
 $\_ \times 2 = \_$

  
 $5 + \_ = \_$   
 $\_ \times 2 = \_$

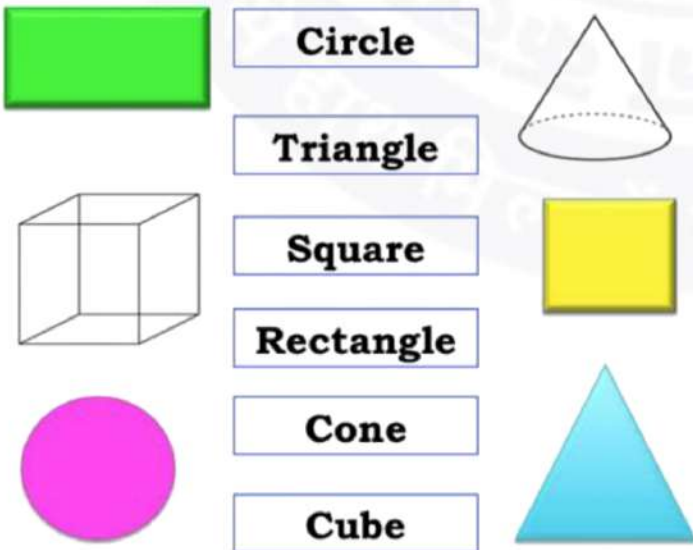
गोला पर सही(✓) और आयत पर (x) का चिन्ह लगाओ।



त्रिभुज पर सही(✓) और वर्ग पर (x) का चिन्ह लगाओ।




आकृतियों के नाम को अंग्रेजी में मिलाओ।



आकृतियों के नाम लिखो।



आयत के लिए R, वर्ग के लिए S, त्रिभुज के लिए T, गोला के लिए C लिखो।



आकृतियों के संख्या जोड़कर लिखो।

